

LOGIQUE | SÉRIES GRAPHIQUES

Voici quelques séries graphiques TOUS CONCOURS.

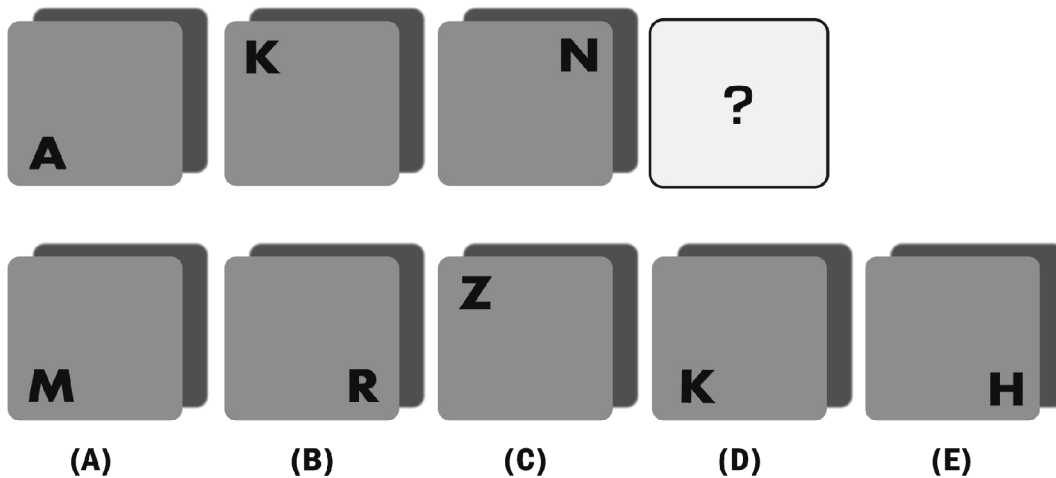
Ces séries graphico-spatiales permettent de se familiariser avec la logique de séries graphiques des concours.

Nous vous conseillons de résoudre ces 12 séries graphiques en un maximum de 9 minutes.






Envoyez-nous vos réponses commentées à l'adresse : tagemage@aurlom.com si vous présentez le Tage Mage, à l'adresse tage2@aurlom.com si vous présentez le Tage 2 et enfin à l'adresse sesame-acces@aurlom.com si vous présentez le concours Sésame.

Nous nous ferons un plaisir de vous renvoyer un corrigé détaillé sous 24 heures.


(1)




(2)




(A)




(B)



(C)






(D)



(E)

(3)



(A)



(B)



(C)




(D)



(E)


(4)




(A)



(B)



(C)



(D)



(E)

(5)

E D 0 E D	A P 15 R R	K L 5 G C	?
-----------------	------------------	-----------------	---

V G 20 T F	Z D 33 E U	A C 25 G E	C Q 12 B D	X P 15 Z N
(A)	(B)	(C)	(D)	(E)

(6)

Y			?
	N	Г	

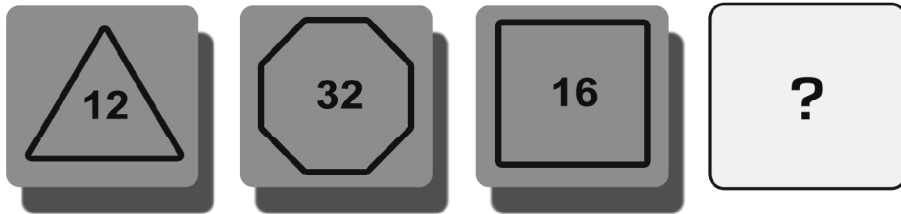
B	A	Z	Y	L
(A)	(B)	(C)	(D)	(E)

(7)

7 8 —+— 9 6	11 9 —+— 7 13	21 4 —+— 13 12	?
-----------------------	-------------------------	--------------------------	---

15 18 —+— 22 11	7 11 —+— 14 3	22 3 —+— 9 3	11 2 —+— 2 13	9 5 —+— 1 15
(A)	(B)	(C)	(D)	(E)

[8]



(A)

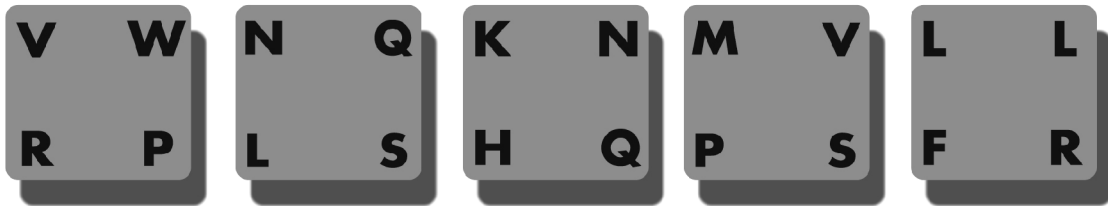
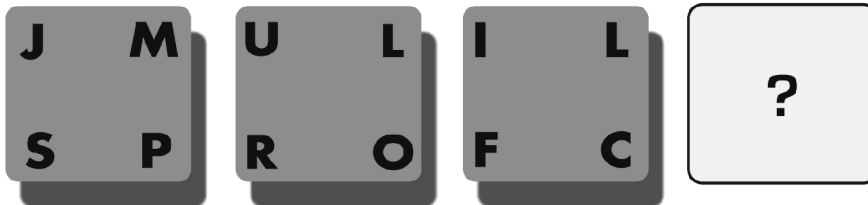
(B)

(C)

(D)

(E)

[9]



(A)

(B)

(C)

(D)

(E)

[10]



(A)

(B)

(C)

(D)

(E)


(11)



(A)



(B)



(C)




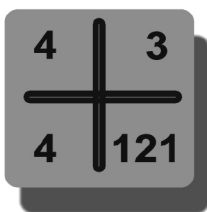


(D)




(E)


(12)




(A)




(B)



(C)



(D)



(E)